

2001 Level 1 Exam

- 1) When should the umpires arrive at the ball park?
 - A) 20 minutes before game time
 - B) 25 minutes before game time
 - C) 30 minutes before game time

- 2) When should the umpires go on the field for the ground rules?
 - A) 10 minutes before game time
 - B) 5 minutes before game time
 - C) 2 minutes before game time

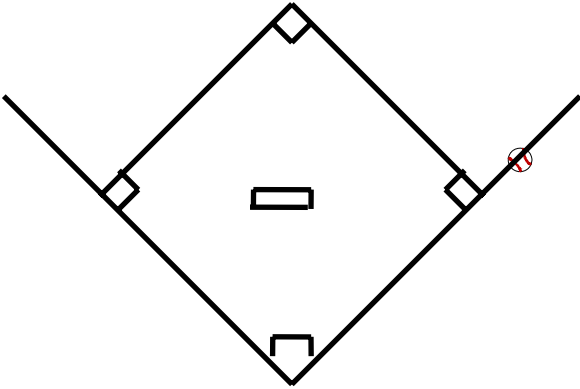
- 3) Based on the following situations, state whether it is a legal catch or no catch.
 - A) Second baseman catches a line drive which has deflected off the pitcher's arm.
 - B) Second baseman catches a line drive which has deflected off the base umpire.
 - C) Second baseman catches a line drive which has deflected off a runner.
 - D) Left Fielder makes the catch, immediately bangs into the wall and drops the ball.
 - E) Third baseman catches the ball and drops it while in the act of making a throw.

- 4) Based on the following situations, state whether the ball is alive or dead.
 - A) A dropped third strike.
 - B) An appeal of a missed base.
 - C) A batter hit by a pitch.
 - D) A foul ball.
 - E) A foul tip.

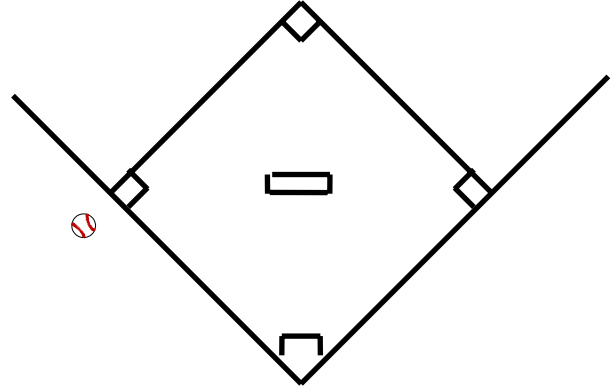
- 5) In order for a dead ball to become live again, does the pitcher have to be on the rubber with the ball? Yes or No?

6) Based on the following diagrams, state whether it is a fair or foul ball. (Circle your answer)

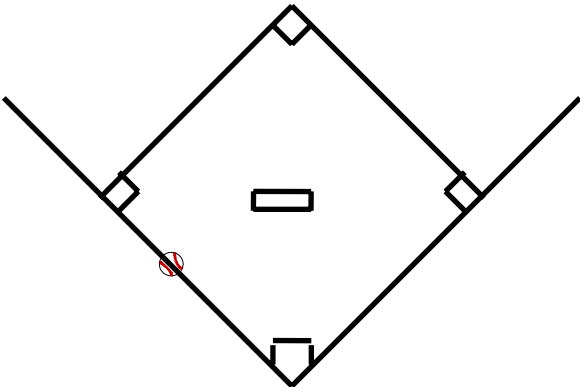
A) Fair / Foul



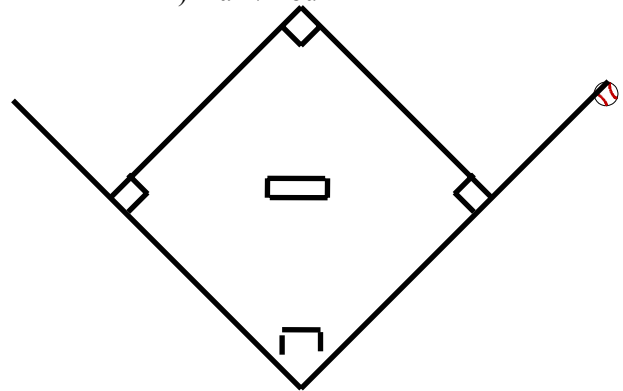
B) Fair / Foul



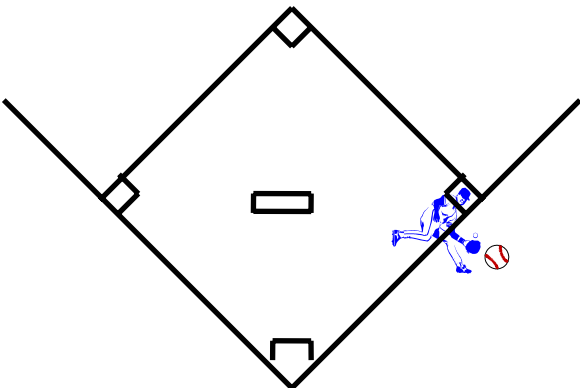
C) Fair / Foul



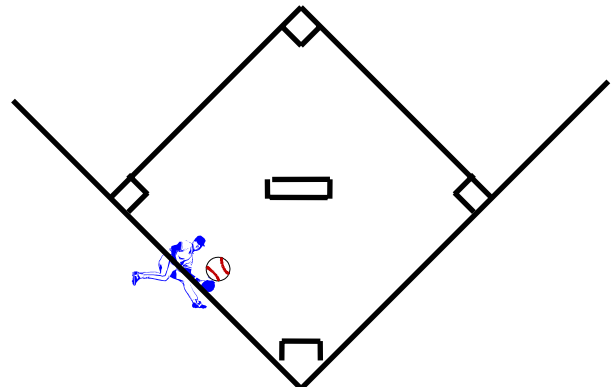
D) Fair / Foul



E) Fair / Foul

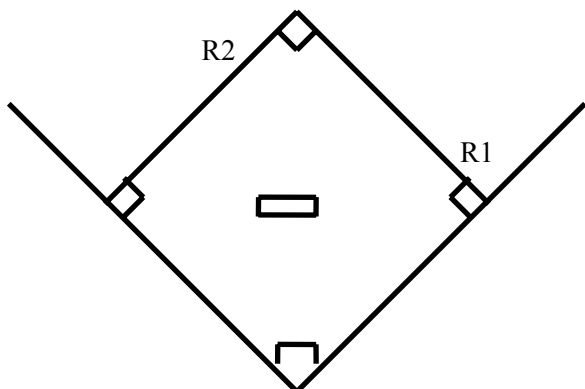


F) Fair / Foul

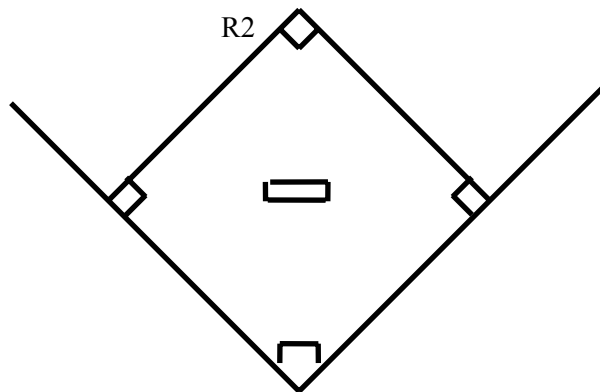


7) Based on the following diagrams, indicate by using the letter “U” where the base umpire should be positioned.

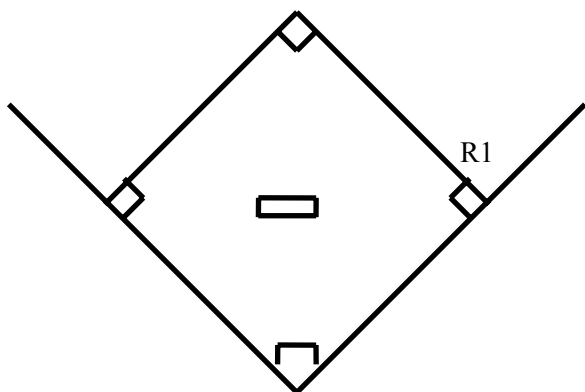
A) Runners on First and Second



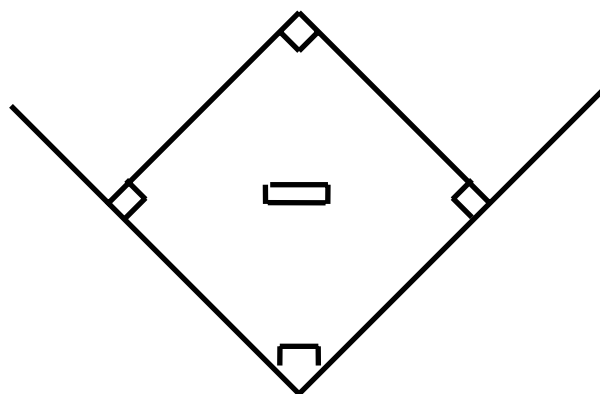
B) Runner only on second



C) Runner only on First



D) No runners on base



8) Either umpire may call time in a 2 man system.

9) While in the act of bunting, the batter is hit on the hands by the pitch. The umpire calls time and award the batter first base.